



DAR-161001010405

Seat No. _____

B. Arch. (Sem.- IV) Examination

May - 2022

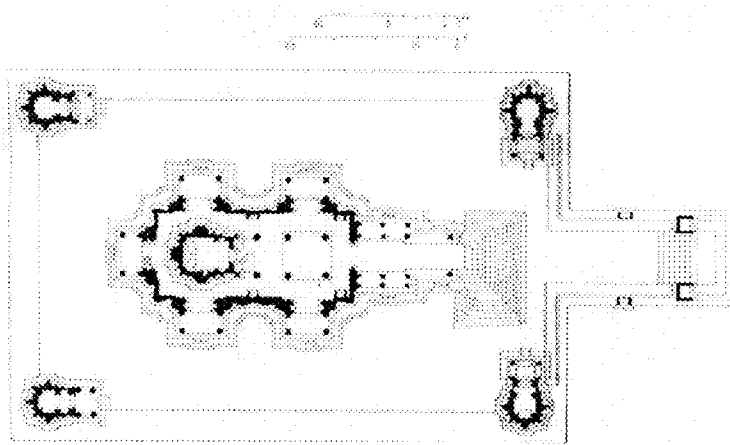
History of Architecture - III

Time : 2 Hours]

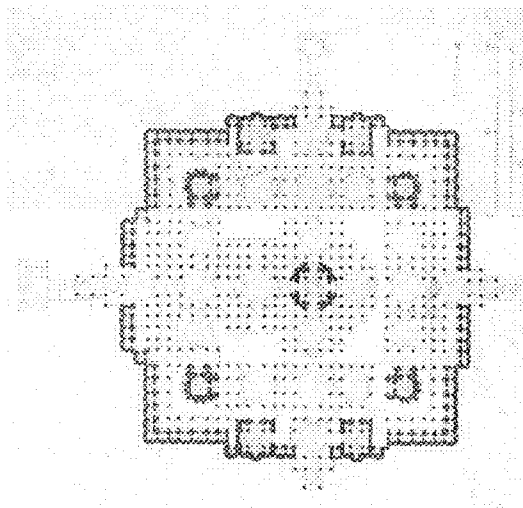
[Total Marks : 50

Instruction : Draw diagrams and sketches wherever necessary to support your answers.

- 1 Write a diagrammatic note on similarities and differences for 20 following temple plans.



(i) lakshmana temple, Khajurahoo




(ii) Jain Temple, Ranakpur

- 2 Discuss role of regional skills, materials and craftsmanship in the architectural development of 'Gujarat' sultanate architecture. 20

OR

- 2 Describe evolution of structural section in Gothic architecture, and development of 4 storey to 3 storey nave elevations in reference to the drawing given below: 20



Nave elevations of four French Gothic cathedrals at the same scale (after Louis Grodecki: (a) Laon, (b) Paris, (c) Chartres, (d) Amiens).

- 3 Define any 5 (five) of the following terminologies with the help of diagrams and write about its architectural purpose in reference to church architecture: 10
- (a) Crypt
 - (b) Clerestory
 - (c) Triforium
 - (d) Gargoyle
 - (e) Transept
 - (f) Apse
 - (g) Crossing